
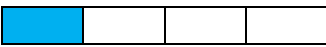

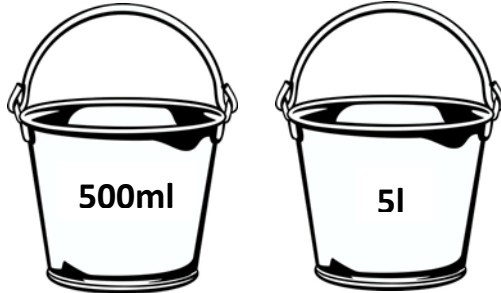


CTSC MATHS THINKER



Grade 4 - Mental Maths

This week we will be having a bit of fun with MENTAL MATHS for the Grade 4 learners.

QUESTION	MEMORANDUM
1. A semicircle  measures ____.	180°
2. What is the place value of 6 in 654 392?	600 000 OR six hundred thousand
3. C is the Roman numeral for?	100
4. Write the largest number with the following digits: 2, 1, 3 and 5.	5321
5. Write in figures 3 thousand and six.	3006
6. The time is 8:35pm. What time will it be after 2 hours?	10:35pm
7. The perimeter of a rectangular field is 100m. Its length is 40m. Find its width	10m
8. 6 minutes 3 seconds = ____ seconds	363 seconds
9. Round off the number 76543 to the nearest 100.	76500
10. $7 \times \underline{\quad} = 14 \times 2$	4
11. Use the number patterns to complete the last line $4 \times 2 = 5 + 4$ $4 \times 3 = 7 + 5$ $4 \times 4 = 9 + 6$ $4 \times 5 = 11 + 7$ $\square \times \square = \square + \square$	$4 \times 6 = 13 + 8$
12. This diagram shows that the fraction $\frac{1}{4}$ is the same as the fraction ____  Quarters  Eighths	2 eighths or $\frac{2}{8}$
13. XXIV + XVIII = ____	XXXXII
14. Five tens + 32 = ____	82
15. Which bucket holds more water? 	5l