

CTSC MATHS THINKER

Time - Grade 5

QUESTION 1.3:

How long did the journey take?


- 90 minutes
- 100 minutes
- 95 minutes
- 105 minutes



Departure



Arrival



CTSC

CTSC MATHS THINKER

Time - Grade 5

QUESTION 1.4:


Which 24 hour digital clock is showing 8:27pm?

8:27

19:27

18:27


20:27




CTSC

CTSC MATHS THINKER

Time - Grade 5




QUESTION 3: Match the times




Quarter past 5

5:15




3 o'clock

4:45




Quarter to 5

3:00



8 o'clock

10:30



Half past 10

8:00