

CTSC MATHS THINKER

Time - Grade 4

QUESTION 1:

Choose an estimated time unit for each action.


To clap your hands

- seconds
- minutes
- hours



To toast 6 slices of bread

- seconds
- minutes
- hours




Duration of a school day

- seconds
- minutes
- hours



To blink your eyes

- seconds
- minutes
- hours




CTSC

CTSC MATHS THINKER

Time - Grade 4

QUESTION 2:

Look at the clocks below and write the time in 12 hour and 24 hour formats.



CTSC


CTSC MATHS THINKER

Time - Grade 4

QUESTION 3:

Complete the table by filling in the elapsed times.

START TIME	END TIME	ELAPSED TIME
8:00am	10:30am	
11:30am	2:00pm	
6:15pm	9:30pm	
7:45pm	12:00am (midnight)	



CTSC

CTSC MATHS THINKER

Time - Grade 4


QUESTION 4:

Solve the following time word problems.


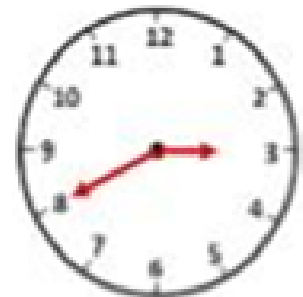
4.1. Tasneem's maths class begins at the time shown on the clock. It's a 2 hour long class. At what time does the class end?



4.2. Jamey works for 1 hour in the garden every day. If she begins at 5:30pm, when does she get done with her work?



4.3. Jane-Claire's swimming lessons begins at the time shown on the clock. It's a three hour long lesson. When does it end?



CTSC